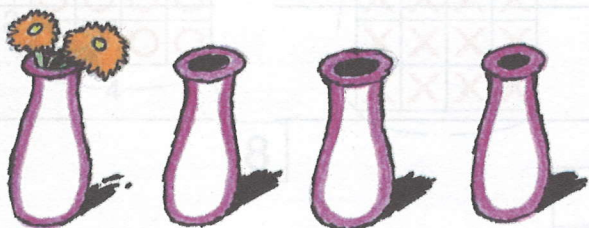


## PŘÍPRAVA NÁSOBENÍ

1. Máš 4 vázy. Do každé vázy dej po 2 kytíčkách. Kolik kytíček budeš potřebovat?

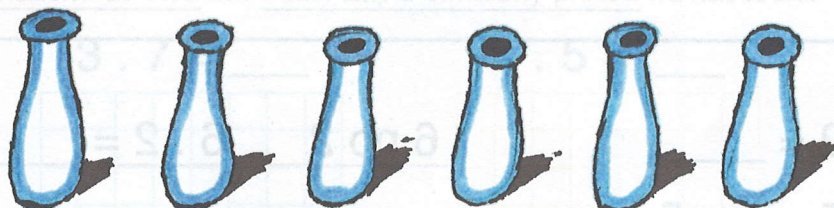


$$\boxed{2} + \boxed{2} + \boxed{2} + \boxed{2} = \boxed{4} \cdot \boxed{2} = \boxed{\phantom{00}}$$

**4** vázy po 2 kytíčkách

$$\boxed{4} \cdot \boxed{2} = \boxed{8}$$

2. Namaluj do každé vázy po 3 kytkách. Kolik jich budeš muset namalovat? Zapiš:




$$\boxed{\phantom{00}} + \boxed{\phantom{00}} + \boxed{\phantom{00}} + \boxed{\phantom{00}} + \boxed{\phantom{00}} + \boxed{\phantom{00}} = \boxed{\phantom{00}} \cdot \boxed{\phantom{00}} = \boxed{\phantom{00}}$$

**6** po 3

$$\boxed{\phantom{00}} \cdot \boxed{\phantom{00}} = \boxed{\phantom{00}}$$

3. Namaluj na každý strom po 5 jablkách. Kolik jich bude dohromady? Zapiš:

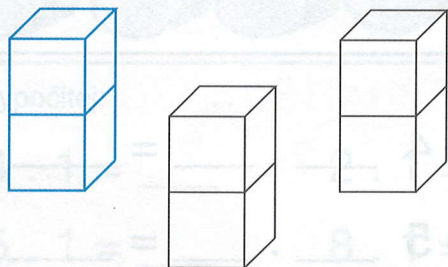


$$\boxed{\phantom{00}} + \boxed{\phantom{00}} + \boxed{\phantom{00}} + \boxed{\phantom{00}} = \boxed{\phantom{00}} \cdot \boxed{\phantom{00}} = \boxed{\phantom{00}}$$

**4** po 5

$$\boxed{\phantom{00}} \cdot \boxed{\phantom{00}} = \boxed{\phantom{00}}$$

4. Vypočítej pomocí sčítání a pak i násobením, kolik krychlí bylo zapotřebí:



$$\boxed{\phantom{00}} + \boxed{\phantom{00}} + \boxed{\phantom{00}} = \boxed{\phantom{00}} \cdot \boxed{\phantom{00}} = \boxed{\phantom{00}}$$

**3** po 2

$$\boxed{\phantom{00}} \cdot \boxed{\phantom{00}} = \boxed{\phantom{00}}$$